








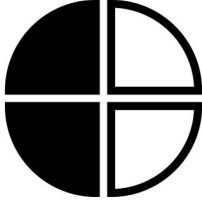



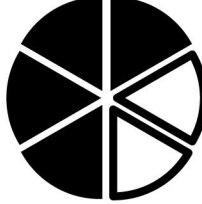

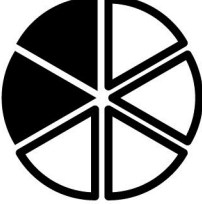
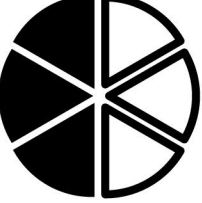
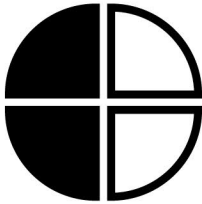

Nom: _____

Les fractions $\frac{1}{2}$ et $\frac{1}{3}$

1. Colorie la partie qui représente la fraction donnée.
Que remarques-tu?

a) $\frac{1}{2}$ 	b) $\frac{2}{4}$ 	c) $\frac{4}{8}$ 
d) $\frac{1}{3}$ 	e) $\frac{3}{9}$ 	f) $\frac{2}{6}$ 

2. Place $<$, $>$ ou $=$ entre les fractions suivantes.

a)  $\frac{1}{2}$ \bigcirc $\frac{2}{4}$ 	b)  $\frac{1}{2}$ \bigcirc $\frac{1}{3}$ 
c)  $\frac{1}{2}$ \bigcirc $\frac{4}{6}$ 	d)  $\frac{1}{3}$ \bigcirc $\frac{2}{6}$ 
e)  $\frac{3}{6}$ \bigcirc $\frac{2}{4}$ 	f)  $\frac{3}{3}$ \bigcirc $\frac{1}{3}$ 