





Name: _____


Solve each addition problem below.


a) 
$$\begin{array}{r} 17 \\ + 15 \\ \hline \end{array}$$


b) 
$$\begin{array}{r} 54 \\ + 27 \\ \hline \end{array}$$

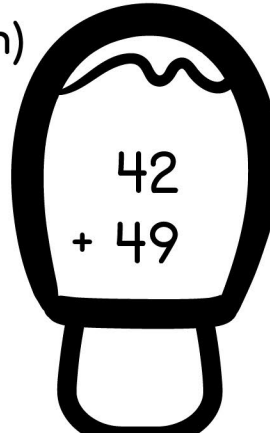
c) 
$$\begin{array}{r} 35 \\ + 38 \\ \hline \end{array}$$

d) 
$$\begin{array}{r} 66 \\ + 25 \\ \hline \end{array}$$


e) 
$$\begin{array}{r} 19 \\ + 62 \\ \hline \end{array}$$


f) 
$$\begin{array}{r} 87 \\ + 12 \\ \hline \end{array}$$


g) 
$$\begin{array}{r} 22 \\ + 38 \\ \hline \end{array}$$

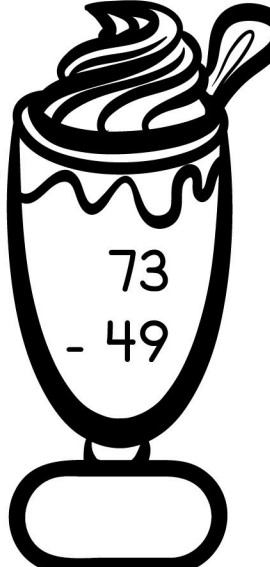
h) 
$$\begin{array}{r} 42 \\ + 49 \\ \hline \end{array}$$

Solve each subtraction problem below.

a) 
$$\begin{array}{r} 54 \\ - 26 \\ \hline \end{array}$$

b) 
$$\begin{array}{r} 82 \\ - 33 \\ \hline \end{array}$$

c) 
$$\begin{array}{r} 93 \\ - 46 \\ \hline \end{array}$$

d) 
$$\begin{array}{r} 73 \\ - 49 \\ \hline \end{array}$$