


Nom _____

Feuille de calculs

Additions 19



$$\begin{array}{r} + 15 \\ 17 \\ \hline \end{array}$$

$$\begin{array}{r} + 12 \\ 28 \\ \hline \end{array}$$

$$\begin{array}{r} + 17 \\ 14 \\ \hline \end{array}$$

$$\begin{array}{r} + 58 \\ 14 \\ \hline \end{array}$$

$$\begin{array}{r} + 87 \\ 5 \\ \hline \end{array}$$



$$\begin{array}{r} + 49 \\ 13 \\ \hline \end{array}$$

$$\begin{array}{r} + 32 \\ 38 \\ \hline \end{array}$$

$$\begin{array}{r} + 25 \\ 15 \\ \hline \end{array}$$

$$\begin{array}{r} + 62 \\ 18 \\ \hline \end{array}$$

Soustractions 19



$$\begin{array}{r} - 75 \\ 6 \\ \hline \end{array}$$

$$\begin{array}{r} - 60 \\ 20 \\ \hline \end{array}$$

$$\begin{array}{r} - 42 \\ 24 \\ \hline \end{array}$$

$$\begin{array}{r} - 25 \\ 18 \\ \hline \end{array}$$

$$\begin{array}{r} - 95 \\ 48 \\ \hline \end{array}$$

$$\begin{array}{r} - 58 \\ 39 \\ \hline \end{array}$$

$$\begin{array}{r} - 84 \\ 56 \\ \hline \end{array}$$

$$\begin{array}{r} - 61 \\ 8 \\ \hline \end{array}$$

$$\begin{array}{r} - 100 \\ 56 \\ \hline \end{array}$$